

**LITTLE MUHEJI SCHOOL**  
**SET XXV EXAMINATION 2020**  
**PRIMARY SEVEN SOCIAL STUDIES**

**NAME:** \_\_\_\_\_


**CLASS:** \_\_\_\_\_ **STREAM:** \_\_\_\_\_

1. Name the symbol that helps in locating the place where the school is found.  
.....
2. On which side of the road should pedestrians use while traveling?  
.....
3. Give one way a community can benefit from the school.  
.....
4. Name the type of family which is composed of mother, father, biological children and maid.  
.....
5. How do prevailing winds influence the climate of Africa?  
.....
6. Give any one reason why animals move from one place to another.  
.....
7. How is a carpenter important in their locality?  
.....
8. Name the kind of doctors responsible for examining and trading sick human eyes.  
.....
9. How does a school going girl help the police to keep law and order?  
.....
10. Mention one National symbol found on the Uganda currency.  
.....
11. Which element gives detailed information about a map?  
.....
12. Why do most people in your society keep dogs?  
.....

13. Which cultural practice is commonly done by Bagisu in your society?  
.....
14. Cite out the major role of a primary teacher.  
.....
15. Which weather condition is suitable for winnowing grains?  
.....
16. Give one advantage of a nuclear family over an extended family.  
.....
17. Define the term market.  
.....  
.....
18. How do citizens of Uganda show their respect when singing the National Anthem?  
.....
19. Name the place at school where pupils have physical education.  
.....
20. How are religious leaders important in a community?  
.....
21. Identify the type of houses built by people who live in the equatorial regions.  
.....
22. Identify the type of budget shown below.



23. What is the advantage of having the type of budget shown in the diagram above?  
.....
24. Give any one reason why a health centre should have an ambulance.  
.....

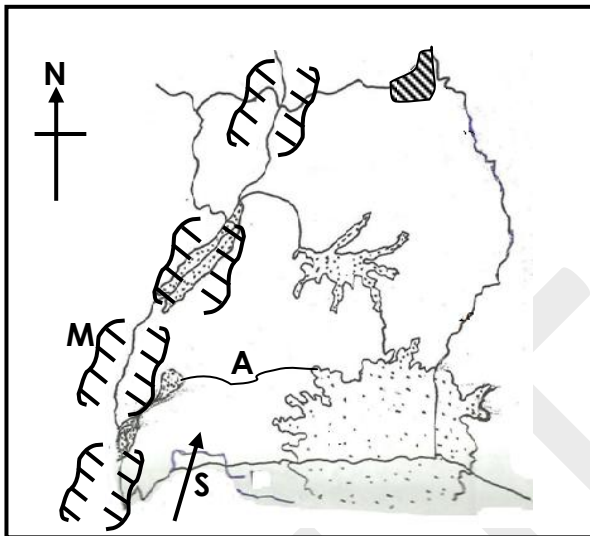
25. Give one importance of a National constitution.  
.....
26. How does altitude influence the climate of an area?  
.....
27. Why was Africa called a dark continent by the Europeans?  
.....
28. Give one way in which culture is important in a community.  
.....
29. Name the Uganda's National Emblem.  
.....
30. State one importance of games and sports in a community.  
.....
31. How is a school important to people who live around it?  
.....
32. What is the main work of UWESO?  
.....
33. Why was LEGCO formed?  
.....
34. Which bank in Uganda prints and issues new money?  
.....
35. How is vegetation important to herbalists?  
.....
36. What was the main reason for the migration of the Bantu?  
.....
37. Give the meaning of the term 'sand dunes'  
.....  
.....
38. Identify the symbol below.  
  
.....
39. How do people show respect to the National Anthem when it is being sung?  
.....

40. How do commercial banks help people to develop?

.....

### SECTION B

41. Study the map below and answer the questions.



a) Name the river marked with letter **A**.

A.....

b) Which ethnic group entered Uganda through route **S**?

.....

c) Name the physical feature marked **M**.

.....

d) What is the main occupation of people who live in Kalangala?

.....

42. a) What is a national park?

.....

b) Name the largest game park in East Africa.

.....

c) State any two importance of game parks.

i).....

ii).....

43.(a) Write C.A.O in full.

.....

- (b) What title is given to the person who chairs district council meetings?  
.....
- c) Which ministry is responsible for the administration of all districts?  
.....
- d) Why is Kampala taken to be a special district?  
.....

44.a) What is the work of a black smith?  
.....

b) Give any three things made by a black smith in a community.

- i).....
- ii).....
- iii).....

45. a) Explain the following terms;

- i)Pastoralism .....
- .....
- ii)Transhumance.....
- .....

b) Give any two uses of animals to the Karimojong.

- i).....
- ii).....

46.a) What is climate?  
.....

b) Write down the two aspects of climate.

- i).....
- ii).....

c) State one human activity that is affected by climate.  
.....

47.(a)When did Uganda attain her independence?  
.....

(b) State two reasons why African demanded for their independence.

- i) .....
- ii).....

c) Who was the first vice president of Uganda?  
.....

48.a) Explain the term population.

.....  
.....

b) Give two problems facing people in urban areas.

i).....

ii).....

c) Give one reason why the population census is carried out after ten years.

.....

49. a) Write IBEACo in full.

.....

b) Who was the representative of IBEACo in Uganda?

.....

c) Give one reason why IBEACo collapse in Uganda.

.....

d) Who was the founder of IBEACo?

.....

50. Fill the table below correctly.

Weather instrument	Use
a)Wind vane	
b) Anemometer	
c)Barometer	
d)Hygrometer	

51. a) What does the term tourism mean?

.....  
.....

b) Why is tourism called an industry?

.....

c) List down two tourist attraction in Uganda.

i).....

ii).....

52. a) What is a community?

.....  
.....

- b) Apart from traders, mention any two examples of communities.  
 i).....  
 ii).....
- c) Mention one problem faced by communities as they do their work.  
 .....

53. Match A with B correctly.

- |                      |   |
|----------------------|---|
| a) John Speke        | named Rwenzori mountain of the moon.    |
| b) Samuel Baker      | named L.Nalubaale Lake Victoria.        |
| c) Henry M. Stanley  | was murdered in Busoga.                 |
| d) Bishop Hannington | saw L.Mwitanzige and named it L.Albert. |

- i) John Speke.....  
 ii) Samuel Baker.....  
 iii) Henry M. Stanley.....  
 iv) Bishop Hannington.....

54. a) What is a valley?

.....  
 .....

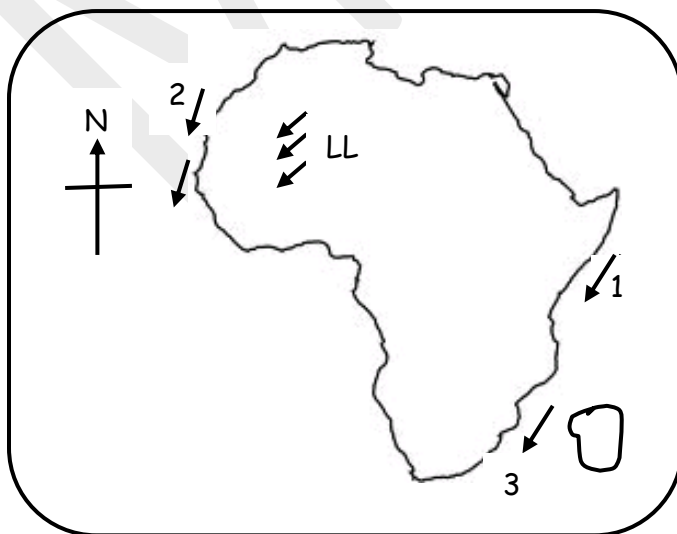
(b) State any two problems faced by people in highland areas.

- i).....  
 ii).....

c) Why do the people of Kapchorwa rear donkeys?

.....

55. Study the map of Africa below.



- a) Name the ocean currents marked;  
i)1.....  
ii)2.....  
iii)3.....
- b) How do the prevailing winds marked LL influence Africa's climate?  
.....

*END*